

Name _____

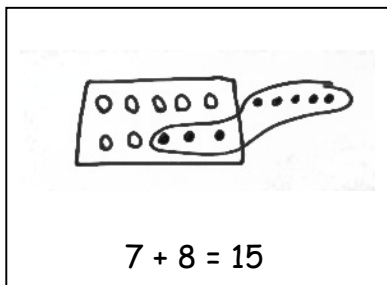
Date _____

Jeremy had 7 big rocks and 8 little rocks in his pocket.

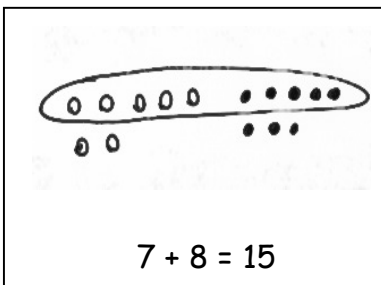
How many rocks does Jeremy have?

1. Circle all student work that correctly matches the story.

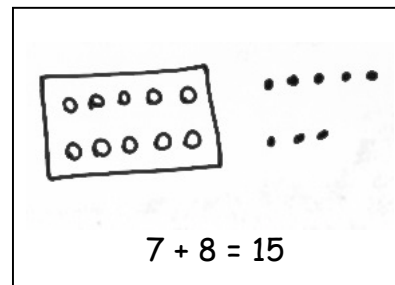
a.



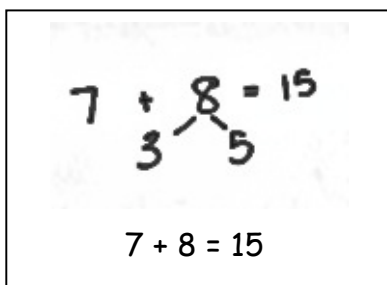
b.



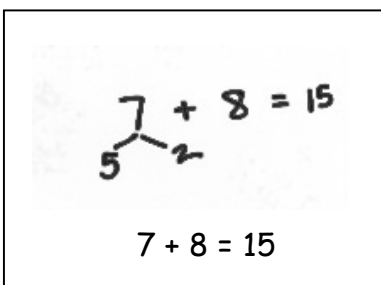
c.



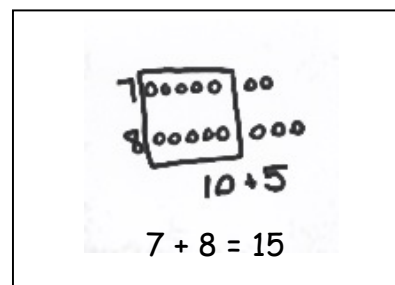
d.



e.



f.



2. Fix the work that was incorrect by making a new drawing in the space below with the matching number sentence.

Solve on your own. Show your thinking by drawing or writing. Write a statement to answer the question.

3. There are 4 vanilla cupcakes and 8 chocolate cupcakes for the party. How many cupcakes were made for the party?

-
4. There are 5 girls and 7 boys on the playground. How many students are on the playground?

When you are done, share your solutions with a partner. How did your partner solve each problem? Be ready to share how your partner solved the problems.