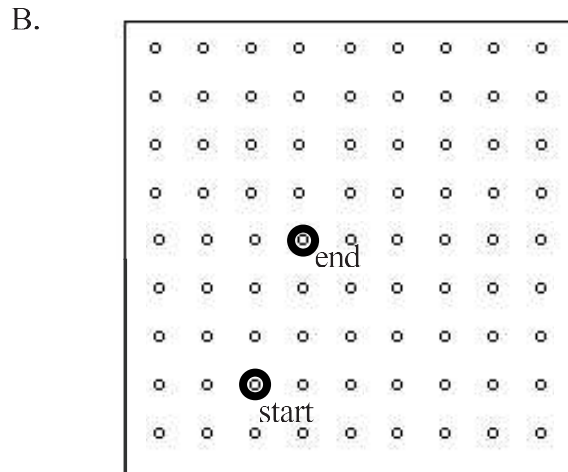
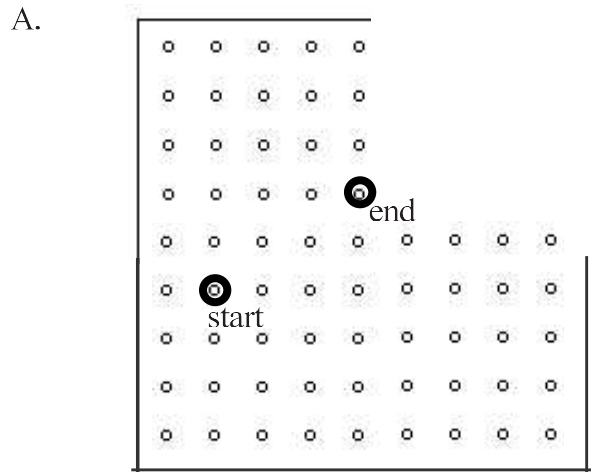


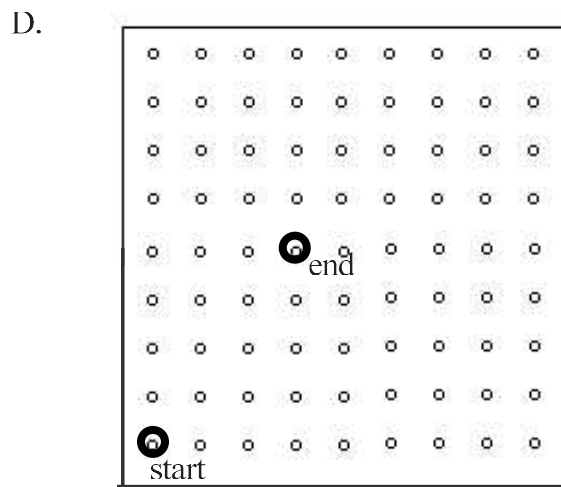
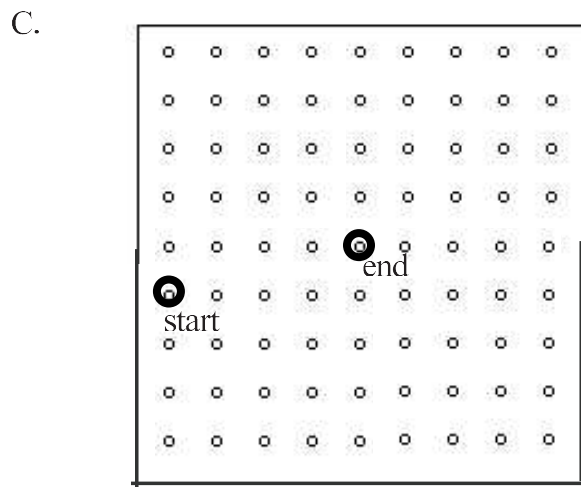
For each of the following problems:

- 1) Draw the rise and run between given points.
- 2) Write the slope of the line.
- 3) Draw a line through the two points to each edge.
- 4) Circle another point on the line and draw rise/run.



Rise: _____ Run: _____
Slope: _____

Rise: _____ Run: _____
Slope: _____



Rise: _____ Run: _____
Slope: _____

Rise: _____ Run: _____
Slope: _____

5.) Order the lines above by steepness from least to greatest. _____, _____, _____, _____

6.) Write the slope of the lines in the order above. _____, _____, _____, _____

7.) What do you notice about the list of slope values?