

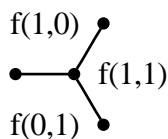
PUMaC 2008-9 Power Test

1 Forms and Landscapes

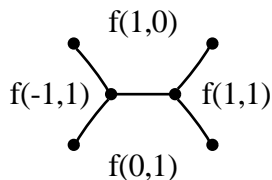
An *integer-valued quadratic form* is a polynomial (in two variables) of the form $f(x, y) = ax^2 + hxy + by^2$, where a , h , and b are integers. Since this is the only type of quadratic form we are going to deal with, we will just call them forms.

Note that $f(x, y) = f(-x, -y)$.

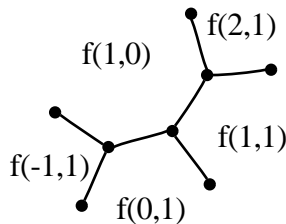
A form corresponds to a *landscape*, which is a picture split into regions. To draw one, we start with these three regions, and label them with the specified values of the form.



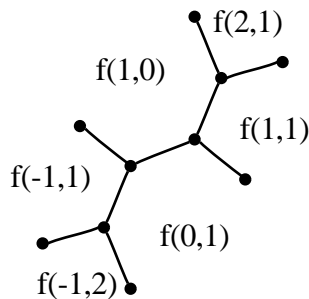
Now we can expand the picture in any direction according to the following rule: If $f(x_1, y_1)$ and $f(x_2, y_2)$ are in the regions to either side of an edge, then $f(x_1 + x_2, y_1 + y_2)$ and $f(x_1 - x_2, y_1 - y_2)$ are in the regions on either end. For example, in the above picture, $f(0, 1)$ and $f(1, 0)$ are to either side of the horizontal edge, so $f(1, 1)$ and $f(-1, 1)$ are on either end. $f(1, 1)$ is already on the right end, so $f(-1, 1)$ is on the other end.



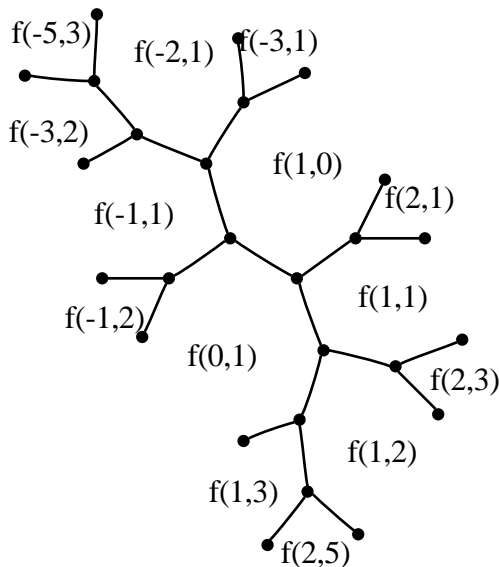
Similarly, $f(1, 1)$ and $f(1, 0)$ are to either side of another edge, so on the opposite ends of it are $f(2, 1)$ and $f(0, 1)$. We know which end $f(0, 1)$ is on, so $f(2, 1)$ is on the other end:



Again, $f(-1, 1)$ and $f(0, 1)$ are on either side of an edge, so we expect to find $f(-1, 2)$ and $f(-1, 0)$ on the ends. But $f(1, 0)$ is already on the end! This isn't a problem, since $f(-1, 0) = f(1, 0)$ for any form f . So, we think of $f(x, y)$ and $f(-x, -y)$ as the same thing. So, $f(-1, 2)$ (or $f(1, -2)$) goes on the other end:

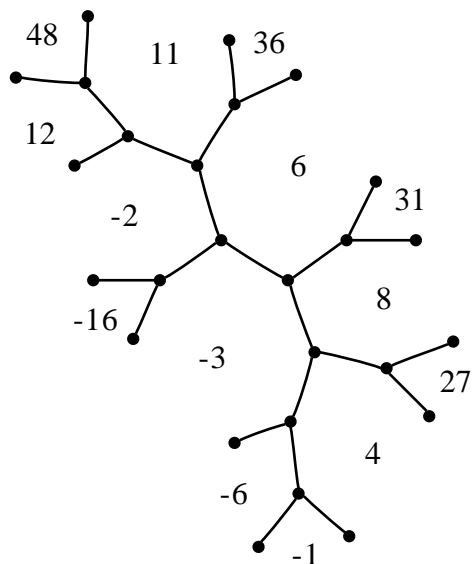


Here it is expanded a bit:



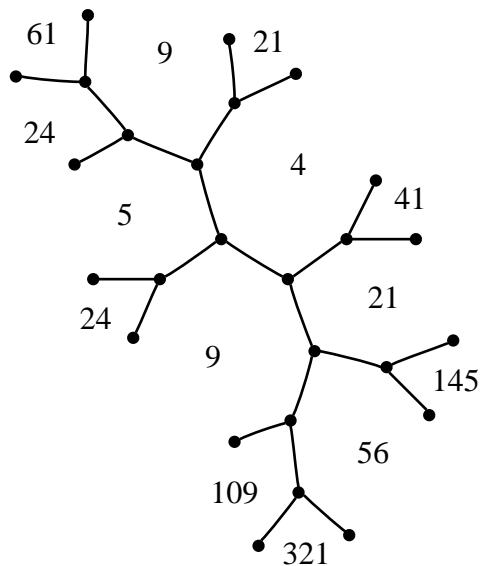
It turns out that for every pair of relatively prime integers a and b , $f(a, b)$ (or $f(-a, -b)$) occurs exactly once on the landscape. You may use this fact without proof.

Now taking an actual example form and filling in the values, $f(x, y) = 6x^2 + 5xy - 3y^2$, the corresponding section of the landscape is:



Question 1.1: Draw the same section of the landscape for the form $x^2 + 2xy - 3y^2$

Question 1.2: Give the form for which the following is the same section of the landscape.



2 The Arithmetic Progression

Conveniently, for any form f

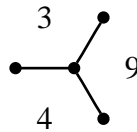
$$f(x_1, y_1) + f(x_2, y_2) = \frac{1}{2} (f(x_1 + x_2, y_1 + y_2) + f(x_1 - x_2, x_1 - y_2)) \quad (1)$$

Rearranging a little, we get

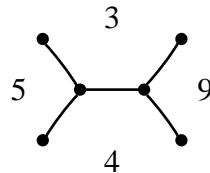
$$\begin{aligned} (f(x_1, y_1) + f(x_2, y_2)) - f(x_1 - x_2, x_1 - y_2) = \\ f(x_1 + x_2, y_1 + y_2) - (f(x_1, y_1) + f(x_2, y_2)) \end{aligned}$$

In other words, the numbers $f(x_1 - x_2, x_1 - y_2)$, $(f(x_1, y_1) + f(x_2, y_2))$, $f(x_1 + x_2, y_1 + y_2)$ make an arithmetic progression.

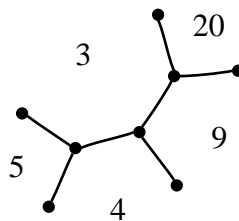
This makes it much easier to draw landscapes. Say I start with the form $f(x, y) = 3x^2 + 2xy + 4y^2$:



If I want to fill in the value x to the left of the horizontal edge, I know that x , $3 + 4$, and 9 make an arithmetic progression. So, $x = 5$.

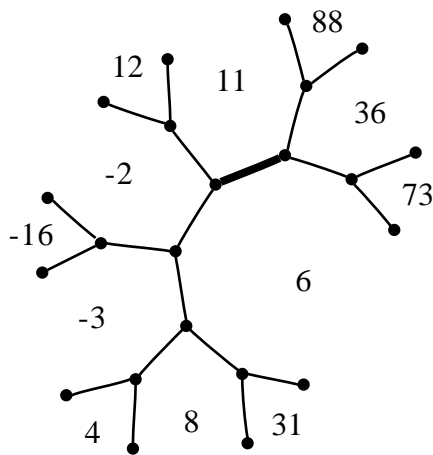
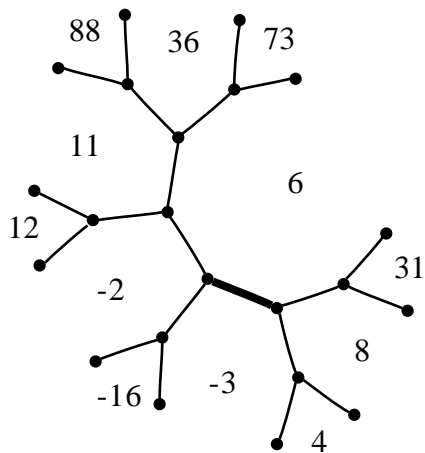


If I want to fill in the value y to the top right, I know that 4 , $3+9$, and y make an arithmetic progression. So, y must be 20 .



The arithmetic progression shows that the values in any three regions which share a vertex determine the rest of the landscape. We say that two forms are *equivalent* if you can line up their landscapes so that the values in the regions are the same.

For example, the form $f(x, y) = 6x^2 + 5xy - 3y^2$ and the form $g(x, y) = 11x^2 + 19xy + 6y^2$ are equivalent. Here are sections of their landscapes:



However, if the landscape of one form is just the reflection of that of another, then we don't consider the forms to be equivalent. In particular, the forms $3x^2 - 2xy + 4x^2$ and $3x^2 + 2xy + 4x^2$ are not equivalent.

- Question 2.1:** Are the forms $x^2 + y^2$ and $-x^2 - y^2$ equivalent?
- Question 2.2:** Are the forms $3x^2 + 2xy + 4y^2$ and $4x^2 - 2xy + 3y^2$ equivalent?
- Question 2.3:** Are the forms $5x^2 - 5xy + y^2$ and $x^2 + xy + y^2$ equivalent?
- Question 2.4:** Are the forms $88x^2 + 113xy + 36y^2$ and $8x^2 - 33xy + 31y^2$ equivalent?
- Question 2.5:** Are the forms $90x^2 + 107xy + 32y^2$ and $101x^2 - 341xy + 288y^2$ equivalent?
- Question 2.6:** Are the forms $3x^2 - 2xy$ and $4x^2 - y^2$ equivalent?
- Question 2.7:** Are the forms $x^2 + xy - 9y^2$ and $-x^2 - xy + 9y^2$ equivalent?
- Question 2.8:** Are the forms $x^2 + xy - 11y^2$ and $-x^2 - xy + 11y^2$ equivalent?
- Question 2.9:** Are the forms $x^2 + xy - 12y^2$ and $-x^2 - xy + 12y^2$ equivalent?

3 Indefinite Forms

The *discriminant* of a form $ax^2 + hxy + by^2$ is the value $D = h^2 - 4ab$.

Question 3.1: Do the following numbers occur as discriminants of forms? (For each number, if yes, give an example, if no, prove it.) 0, 1, 2, 3, -1, -2, -3, 13, -13, 22, -22, 47, -47, 100, -100, 31415, -31415.

Question 3.2: Give an easy way to tell if a given integer occurs as the discriminant of a form.

Question 3.3: Prove or disprove: if two forms are equivalent, they have the same discriminant.

Question 3.4: Prove or disprove: if two forms have the same discriminant, they are equivalent.

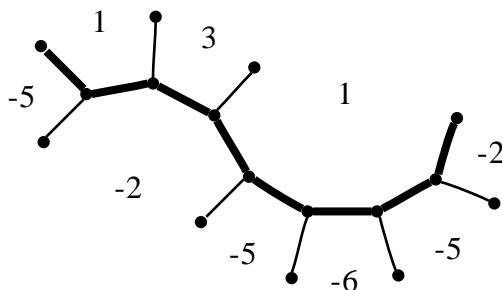
We say a form is *indefinite* if it can take on both positive and negative values. A *river* of a form is a connected chain of edges on its landscape each of which separates a region with a positive value from a region with a negative value, which is not a subset of any other such chain.

Question 3.5: Prove or disprove: a form is indefinite if and only if it has a positive discriminant.

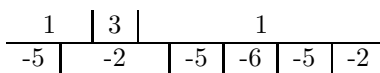
Question 3.6: Prove or disprove: every indefinite form has a river.

Question 3.7: Prove or disprove: every form has at most one river.

We call a river *periodic* if the values to either side of it repeat. The *period* of a form is how many edges it takes for it to repeat. For example, this river is periodic with period 6.



To make things a little more manageable, we'll draw rivers like this:



We call a positive integer D a *periodic* discriminant if there is an indefinite form with discriminant D and a periodic river.

We call a positive integer D a *nonperiodic* discriminant if there is an indefinite form with discriminant D and no periodic river.

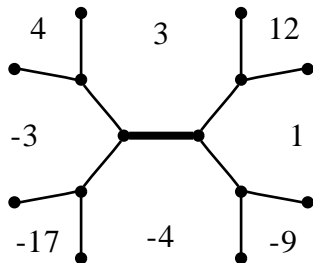
Question 3.8: Prove or disprove: a discriminant can't be both periodic and nonperiodic. (That is, if one indefinite form of some discriminant has a periodic river, all indefinite forms of that discriminant do.)

Question 3.9: What are the nonperiodic discriminants? Prove your answer.

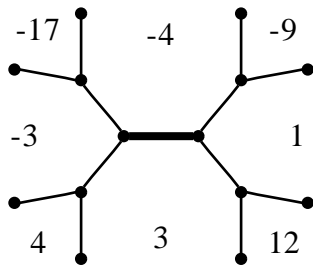
Question 3.10: How many forms (up to equivalence) are there for each nonperiodic discriminant?

4 Symmetries

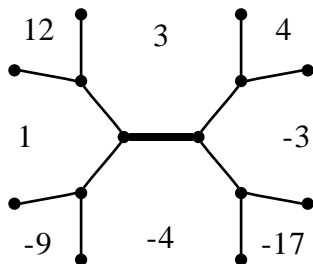
We can reflect the landscape of a form across or "through" an edge in that landscape. For example, if we start with this landscape, corresponding to the form $4x^2 + 2xy + 3y^2$:



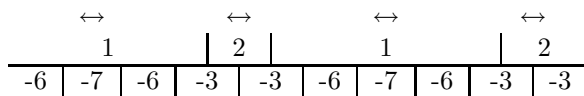
The reflection of this landscape *across* the bold edge is



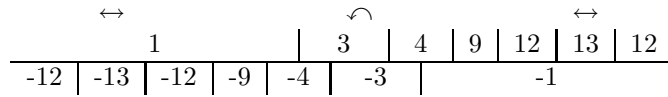
And the reflection of that same landscape *through* the bold edge is



A form's river can be symmetric in several ways. For example, the river pictured below is has two types of symmetry. One given by reflection through an edge on the river (between 1 and -7); one given by reflection across an edge adjacent to the river (between -3 and -3).



The following river is symmetric in a different way. If you rotate the landscape around the center of the edge between 3 and -3, and negate each value, you get the same landscape.



We call these three types of symmetries of a river (reflection through an edge on the river, reflection across an edge adjacent to it, and rotation around an edge on the river combined with negation) primitive symmetries. In the above form, we consider the two pictured reflections to be the same. Both of the rivers above, then, have exactly two primitive symmetries.

Question 4.1: Is there a periodic river with no primitive symmetries? If so, give an example, if not, prove it.

Question 4.2: Is there a periodic river with exactly one primitive symmetry? If so, give an example, if not, prove it.

Question 4.3: Is there a periodic river with exactly three primitive symmetries? If so, give an example, if not, prove it.

Question 4.4: Is there a periodic river that is not equivalent to its negation, its reflection, or its reflection's negation? If so, give an example. If not, prove it.